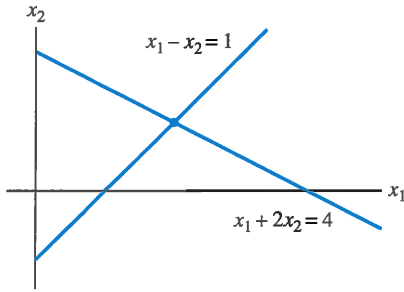


## 1.1 EXERCISES

Solve each system in Exercises 1–4 by using elementary row operations on the equations or on the augmented matrix. Follow the systematic elimination procedure described in this section.

- $$\begin{aligned} x_1 + 5x_2 &= 7 \\ -2x_1 - 7x_2 &= -5 \end{aligned}$$
- $$\begin{aligned} 3x_1 + 6x_2 &= -3 \\ 5x_1 + 7x_2 &= 10 \end{aligned}$$
- Find the point  $(x_1, x_2)$  that lies on the line  $x_1 + 2x_2 = 4$  and on the line  $x_1 - x_2 = 1$ . See the figure.



- Find the point of intersection of the lines  $x_1 + 2x_2 = -13$  and  $3x_1 - 2x_2 = 1$

Consider each matrix in Exercises 5 and 6 as the augmented matrix of a linear system. State in words the next two elementary row operations that should be performed in the process of solving the system.

$$5. \begin{bmatrix} 1 & -4 & -3 & 0 & 7 \\ 0 & 1 & 4 & 0 & 6 \\ 0 & 0 & 1 & 0 & 2 \\ 0 & 0 & 0 & 1 & -5 \end{bmatrix}$$

$$6. \begin{bmatrix} 1 & -6 & 4 & 0 & -1 \\ 0 & 2 & -7 & 0 & 4 \\ 0 & 0 & 1 & 2 & -3 \\ 0 & 0 & 4 & 1 & 2 \end{bmatrix}$$

In Exercises 7–10, the augmented matrix of a linear system has been reduced by row operations to the form shown. In each case, continue the appropriate row operations and describe the solution set of the original system.

$$7. \begin{bmatrix} 1 & 7 & 3 & -4 \\ 0 & 1 & -1 & 3 \\ 0 & 0 & 0 & 1 \\ 0 & 0 & 1 & -2 \end{bmatrix}$$

$$8. \begin{bmatrix} 1 & -5 & 4 & 0 & 0 \\ 0 & 1 & 0 & 1 & 0 \\ 0 & 0 & 3 & 0 & 0 \\ 0 & 0 & 0 & 2 & 0 \end{bmatrix}$$

$$9. \begin{bmatrix} 1 & -1 & 0 & 0 & -5 \\ 0 & 1 & -2 & 0 & -7 \\ 0 & 0 & 1 & -3 & 2 \\ 0 & 0 & 0 & 1 & 4 \end{bmatrix}$$

$$10. \begin{bmatrix} 1 & 3 & 0 & -2 & -7 \\ 0 & 1 & 0 & 3 & 6 \\ 0 & 0 & 1 & 0 & 2 \\ 0 & 0 & 0 & 1 & -2 \end{bmatrix}$$

Solve the systems in Exercises 11–14.

- $$\begin{aligned} x_2 + 5x_3 &= -4 \\ x_1 + 4x_2 + 3x_3 &= -2 \\ 2x_1 + 7x_2 + x_3 &= -2 \end{aligned}$$
- $$\begin{aligned} x_1 - 5x_2 + 4x_3 &= -3 \\ 2x_1 - 7x_2 + 3x_3 &= -2 \\ -2x_1 + x_2 + 7x_3 &= -1 \end{aligned}$$
- $$\begin{aligned} x_1 - 3x_3 &= 8 \\ 2x_1 + 2x_2 + 9x_3 &= 7 \\ x_2 + 5x_3 &= -2 \end{aligned}$$
- $$\begin{aligned} 2x_1 - 6x_3 &= -8 \\ x_2 + 2x_3 &= 3 \\ 3x_1 + 6x_2 - 2x_3 &= -4 \end{aligned}$$

Determine if the systems in Exercises 15 and 16 are consistent. Do not completely solve the systems.

$$15. \begin{aligned} x_1 - 6x_2 &= 5 \\ x_2 - 4x_3 + x_4 &= 0 \\ -x_1 + 6x_2 + x_3 + 5x_4 &= 3 \\ -x_2 + 5x_3 + 4x_4 &= 0 \end{aligned}$$

$$16. \begin{aligned} 2x_1 - 4x_4 &= -10 \\ 3x_2 + 3x_3 &= 0 \\ x_3 + 4x_4 &= -1 \\ -3x_1 + 2x_2 + 3x_3 + x_4 &= 5 \end{aligned}$$

- Do the three lines  $2x_1 + 3x_2 = -1$ ,  $6x_1 + 5x_2 = 0$ , and  $2x_1 - 5x_2 = 7$  have a common point of intersection? Explain.
- Do the three planes  $2x_1 + 4x_2 + 4x_3 = 4$ ,  $x_2 - 2x_3 = -2$ , and  $2x_1 + 3x_2 = 0$  have at least one common point of intersection? Explain.

In Exercises 19–22, determine the value(s) of  $h$  such that the matrix is the augmented matrix of a consistent linear system.

$$19. \begin{bmatrix} 1 & h & 4 \\ 3 & 6 & 8 \end{bmatrix}$$

$$20. \begin{bmatrix} 1 & h & -5 \\ 2 & -8 & 6 \end{bmatrix}$$

$$21. \begin{bmatrix} 1 & 4 & -2 \\ 3 & h & -6 \end{bmatrix}$$

$$22. \begin{bmatrix} -4 & 12 & h \\ 2 & -6 & -3 \end{bmatrix}$$

In Exercises 23 and 24, key statements from this section are either quoted directly, restated slightly (but still true), or altered in some way that makes them false in some cases. Mark each statement True or False, and *justify* your answer. (If true, give the

approximate location where a similar statement appears, or refer to a definition or theorem. If false, give the location of a statement that has been quoted or used incorrectly, or cite an example that shows the statement is not true in all cases.) Similar true/false questions will appear in many sections of the text.

23. a. Every elementary row operation is reversible.  
 b. A  $5 \times 6$  matrix has six rows.  
 c. The solution set of a linear system involving variables  $x_1, \dots, x_n$  is a list of numbers  $(s_1, \dots, s_n)$  that makes each equation in the system a true statement when the values  $s_1, \dots, s_n$  are substituted for  $x_1, \dots, x_n$ , respectively.  
 d. Two fundamental questions about a linear system involve existence and uniqueness.
24. a. Two matrices are row equivalent if they have the same number of rows.  
 b. Elementary row operations on an augmented matrix never change the solution set of the associated linear system.  
 c. Two equivalent linear systems can have different solution sets.  
 d. A consistent system of linear equations has one or more solutions.
25. Find an equation involving  $g$ ,  $h$ , and  $k$  that makes this augmented matrix correspond to a consistent system:

$$\left[ \begin{array}{ccc|c} 1 & -4 & 7 & g \\ 0 & 3 & -5 & h \\ -2 & 5 & -9 & k \end{array} \right]$$

26. Suppose the system below is consistent for all possible values of  $f$  and  $g$ . What can you say about the coefficients  $c$  and  $d$ ? Justify your answer.
- $$2x_1 + 4x_2 = f$$
- $$cx_1 + dx_2 = g$$
27. Suppose  $a$ ,  $b$ ,  $c$ , and  $d$  are constants such that  $a$  is not zero and the system below is consistent for all possible values of  $f$  and  $g$ . What can you say about the numbers  $a$ ,  $b$ ,  $c$ , and  $d$ ? Justify your answer.
- $$ax_1 + bx_2 = f$$
- $$cx_1 + dx_2 = g$$
28. Construct three different augmented matrices for linear systems whose solution set is  $x_1 = 3$ ,  $x_2 = -2$ ,  $x_3 = -1$ .

In Exercises 29–32, find the elementary row operation that transforms the first matrix into the second, and then find the reverse row operation that transforms the second matrix into the first.

29.  $\begin{bmatrix} 0 & -2 & 5 \\ 1 & 3 & -5 \\ 3 & -1 & 6 \end{bmatrix}, \begin{bmatrix} 3 & -1 & 6 \\ 1 & 3 & -5 \\ 0 & -2 & 5 \end{bmatrix}$

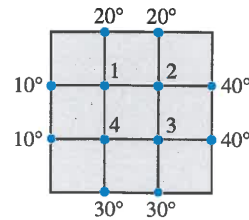
30.  $\begin{bmatrix} 1 & 3 & -4 \\ 0 & -2 & 6 \\ 0 & -5 & 10 \end{bmatrix}, \begin{bmatrix} 1 & 3 & -4 \\ 0 & -2 & 6 \\ 0 & 1 & -2 \end{bmatrix}$

31.  $\begin{bmatrix} 1 & -2 & 1 & 0 \\ 0 & 5 & -2 & 8 \\ 4 & -1 & 3 & -6 \end{bmatrix}, \begin{bmatrix} 1 & -2 & 1 & 0 \\ 0 & 5 & -2 & 8 \\ 0 & 7 & -1 & -6 \end{bmatrix}$

32.  $\begin{bmatrix} 1 & 2 & -5 & 0 \\ 0 & 1 & -3 & -2 \\ 0 & 4 & -12 & 7 \end{bmatrix}, \begin{bmatrix} 1 & 2 & -5 & 0 \\ 0 & 1 & -3 & -2 \\ 0 & 0 & 0 & 15 \end{bmatrix}$

An important concern in the study of heat transfer is to determine the steady-state temperature distribution of a thin plate when the temperature around the boundary is known. Assume the plate shown in the figure represents a cross section of a metal beam, with negligible heat flow in the direction perpendicular to the plate. Let  $T_1, \dots, T_4$  denote the temperatures at the four interior nodes of the mesh in the figure. The temperature at a node is approximately equal to the average of the four nearest nodes—to the left, above, to the right, and below.<sup>3</sup> For instance,

$$T_1 = (10 + 20 + T_2 + T_4)/4, \quad \text{or} \quad 4T_1 - T_2 - T_4 = 30$$



33. Write a system of four equations whose solution gives estimates for the temperatures  $T_1, \dots, T_4$ .
34. Solve the system of equations from Exercise 33. [Hint: To speed up the calculations, interchange rows 1 and 4 before starting “replace” operations.]

<sup>3</sup> See Frank M. White, *Heat and Mass Transfer* (Reading, MA: Addison-Wesley Publishing, 1991), pp. 145–149.

## SOLUTIONS TO PRACTICE PROBLEMS

1. a. For “hand computation,” the best choice is to interchange equations 3 and 4. Another possibility is to multiply equation 3 by  $1/5$ . Or, replace equation 4 by its sum with  $-1/5$  times row 3. (In any case, do not use the  $x_2$  in equation 2 to eliminate the  $4x_2$  in equation 1. Wait until a triangular form has been reached and the  $x_3$  terms and  $x_4$  terms have been eliminated from the first two equations.)

## THEOREM 2

## Existence and Uniqueness Theorem

A linear system is consistent if and only if the rightmost column of the augmented matrix is *not* a pivot column—that is, if and only if an echelon form of the augmented matrix has *no* row of the form

$$[0 \ \cdots \ 0 \ b] \quad \text{with } b \text{ nonzero}$$

If a linear system is consistent, then the solution set contains either (i) a unique solution, when there are no free variables, or (ii) infinitely many solutions, when there is at least one free variable.

The following procedure outlines how to find and describe all solutions of a linear system.

## USING ROW REDUCTION TO SOLVE A LINEAR SYSTEM

1. Write the augmented matrix of the system.
2. Use the row reduction algorithm to obtain an equivalent augmented matrix in echelon form. Decide whether the system is consistent. If there is no solution, stop; otherwise, go to the next step.
3. Continue row reduction to obtain the reduced echelon form.
4. Write the system of equations corresponding to the matrix obtained in step 3.
5. Rewrite each nonzero equation from step 4 so that its one basic variable is expressed in terms of any free variables appearing in the equation.

## PRACTICE PROBLEMS

1. Find the general solution of the linear system whose augmented matrix is

$$\begin{bmatrix} 1 & -3 & -5 & 0 \\ 0 & 1 & 1 & 3 \end{bmatrix}$$

2. Find the general solution of the system

$$\begin{aligned} x_1 - 2x_2 - x_3 + 3x_4 &= 0 \\ -2x_1 + 4x_2 + 5x_3 - 5x_4 &= 3 \\ 3x_1 - 6x_2 - 6x_3 + 8x_4 &= 2 \end{aligned}$$

## 1.2 EXERCISES

In Exercises 1 and 2, determine which matrices are in reduced echelon form and which others are only in echelon form.

$$1. \text{ a. } \begin{bmatrix} 1 & 0 & 0 & 0 \\ 0 & 1 & 0 & 0 \\ 0 & 0 & 1 & 1 \end{bmatrix} \quad \text{b. } \begin{bmatrix} 1 & 0 & 1 & 0 \\ 0 & 1 & 1 & 0 \\ 0 & 0 & 0 & 1 \end{bmatrix}$$

$$\text{c. } \begin{bmatrix} 1 & 0 & 0 & 0 \\ 0 & 1 & 1 & 0 \\ 0 & 0 & 0 & 0 \\ 0 & 0 & 0 & 1 \end{bmatrix} \quad \text{d. } \begin{bmatrix} 1 & 1 & 0 & 1 & 1 \\ 0 & 2 & 0 & 2 & 2 \\ 0 & 0 & 0 & 3 & 3 \\ 0 & 0 & 0 & 0 & 4 \end{bmatrix}$$

2. a.  $\begin{bmatrix} 1 & 0 & 1 & 1 \\ 0 & 1 & 1 & 1 \\ 0 & 0 & 0 & 0 \end{bmatrix}$       b.  $\begin{bmatrix} 1 & 0 & 0 & 0 \\ 0 & 2 & 0 & 0 \\ 0 & 0 & 1 & 1 \end{bmatrix}$

c.  $\begin{bmatrix} 0 & 0 & 0 & 0 \\ 1 & 2 & 0 & 0 \\ 0 & 0 & 1 & 0 \\ 0 & 0 & 0 & 1 \end{bmatrix}$

d.  $\begin{bmatrix} 0 & 1 & 1 & 1 & 1 \\ 0 & 0 & 1 & 1 & 1 \\ 0 & 0 & 0 & 0 & 1 \\ 0 & 0 & 0 & 0 & 0 \end{bmatrix}$

Row reduce the matrices in Exercises 3 and 4 to reduced echelon form. Circle the pivot positions in the final matrix and in the original matrix, and list the pivot columns.

3.  $\begin{bmatrix} 1 & 2 & 4 & 8 \\ 2 & 4 & 6 & 8 \\ 3 & 6 & 9 & 12 \end{bmatrix}$       4.  $\begin{bmatrix} 1 & 2 & 4 & 5 \\ 2 & 4 & 5 & 4 \\ 4 & 5 & 4 & 2 \end{bmatrix}$

5. Describe the possible echelon forms of a nonzero  $2 \times 2$  matrix. Use the symbols ■, \*, and 0, as in the first part of Example 1.

6. Repeat Exercise 5 for a nonzero  $3 \times 2$  matrix.

Find the general solutions of the systems whose augmented matrices are given in Exercises 7–14.

7.  $\begin{bmatrix} 1 & 3 & 4 & 7 \\ 3 & 9 & 7 & 6 \end{bmatrix}$       8.  $\begin{bmatrix} 1 & -3 & 0 & -5 \\ -3 & 7 & 0 & 9 \end{bmatrix}$

9.  $\begin{bmatrix} 0 & 1 & -2 & 3 \\ 1 & -3 & 4 & -6 \end{bmatrix}$       10.  $\begin{bmatrix} 1 & -2 & -1 & 4 \\ -2 & 4 & -5 & 6 \end{bmatrix}$

11.  $\begin{bmatrix} 3 & -2 & 4 & 0 \\ 9 & -6 & 12 & 0 \\ 6 & -4 & 8 & 0 \end{bmatrix}$       12.  $\begin{bmatrix} 1 & 0 & -9 & 0 & 4 \\ 0 & 1 & 3 & 0 & -1 \\ 0 & 0 & 0 & 1 & -7 \\ 0 & 0 & 0 & 0 & 1 \end{bmatrix}$

13.  $\begin{bmatrix} 1 & -3 & 0 & -1 & 0 & -2 \\ 0 & 1 & 0 & 0 & -4 & 1 \\ 0 & 0 & 0 & 1 & 9 & 4 \\ 0 & 0 & 0 & 0 & 0 & 0 \end{bmatrix}$

14.  $\begin{bmatrix} 1 & 0 & -5 & 0 & -8 & 3 \\ 0 & 1 & 4 & -1 & 0 & 6 \\ 0 & 0 & 0 & 0 & 1 & 0 \\ 0 & 0 & 0 & 0 & 0 & 0 \end{bmatrix}$

Exercises 15 and 16 use the notation of Example 1 for matrices in echelon form. Suppose each matrix represents the augmented matrix for a system of linear equations. In each case, determine if the system is consistent. If the system is consistent, determine if the solution is unique.

15. a.  $\begin{bmatrix} \blacksquare & * & * & * \\ 0 & \blacksquare & * & * \\ 0 & 0 & 0 & 0 \end{bmatrix}$

b.  $\begin{bmatrix} 0 & \blacksquare & * & * & * \\ 0 & 0 & \blacksquare & * & * \\ 0 & 0 & 0 & \blacksquare & 0 \end{bmatrix}$

16. a.  $\begin{bmatrix} \blacksquare & * & * \\ 0 & \blacksquare & * \\ 0 & 0 & \blacksquare \end{bmatrix}$

b.  $\begin{bmatrix} \blacksquare & * & * & * & * \\ 0 & 0 & \blacksquare & * & * \\ 0 & 0 & 0 & \blacksquare & * \end{bmatrix}$

In Exercises 17 and 18, determine the value(s) of  $h$  such that the matrix is the augmented matrix of a consistent linear system.

17.  $\begin{bmatrix} 1 & -1 & 4 \\ -2 & 3 & h \end{bmatrix}$       18.  $\begin{bmatrix} 1 & -3 & 1 \\ h & 6 & -2 \end{bmatrix}$

In Exercises 19 and 20, choose  $h$  and  $k$  such that the system has (a) no solution, (b) a unique solution, and (c) many solutions. Give separate answers for each part.

19.  $x_1 + hx_2 = 2$       20.  $x_1 - 3x_2 = 1$   
 $4x_1 + 8x_2 = k$        $2x_1 + hx_2 = k$

In Exercises 21 and 22, mark each statement True or False. Justify each answer.<sup>4</sup>

21. a. In some cases, a matrix may be row reduced to more than one matrix in reduced echelon form, using different sequences of row operations.  
 b. The row reduction algorithm applies only to augmented matrices for a linear system.  
 c. A basic variable in a linear system is a variable that corresponds to a pivot column in the coefficient matrix.  
 d. Finding a parametric description of the solution set of a linear system is the same as *solving* the system.  
 e. If one row in an echelon form of an augmented matrix is  $[0 \ 0 \ 0 \ 5 \ 0]$ , then the associated linear system is inconsistent.
22. a. The reduced echelon form of a matrix is unique.  
 b. If every column of an augmented matrix contains a pivot, then the corresponding system is consistent.  
 c. The pivot positions in a matrix depend on whether row interchanges are used in the row reduction process.  
 d. A general solution of a system is an explicit description of all solutions of the system.  
 e. Whenever a system has free variables, the solution set contains many solutions.

23. Suppose the coefficient matrix of a linear system of four equations in four variables has a pivot in each column. Explain why the system has a unique solution.

24. Suppose a system of linear equations has a  $3 \times 5$  augmented matrix whose fifth column is not a pivot column. Is the system consistent? Why (or why not)?

<sup>4</sup> True/false questions of this type will appear in many sections. Methods for justifying your answers were described before Exercises 23 and 24 in Section 1.1.

25. Suppose the coefficient matrix of a system of linear equations has a pivot position in every row. Explain why the system is consistent.
26. Suppose a  $3 \times 5$  coefficient matrix for a system has three pivot columns. Is the system consistent? Why or why not?
27. Restate the last sentence in Theorem 2 using the concept of pivot columns: "If a linear system is consistent, then the solution is unique if and only if \_\_\_\_\_."
28. What would you have to know about the pivot columns in an augmented matrix in order to know that the linear system is consistent and has a unique solution?
29. A system of linear equations with fewer equations than unknowns is sometimes called an *underdetermined system*. Can such a system have a unique solution? Explain.
30. Give an example of an inconsistent underdetermined system of two equations in three unknowns.
31. A system of linear equations with more equations than unknowns is sometimes called an *overdetermined system*. Can such a system be consistent? Illustrate your answer with a specific system of three equations in two unknowns.
32. Suppose an  $n \times (n + 1)$  matrix is row reduced to reduced echelon form. Approximately what fraction of the total number of operations (flops) is involved in the backward phase of the reduction when  $n = 20$ ? when  $n = 200$ ?

Suppose experimental data are represented by a set of points in the plane. An **interpolating polynomial** for the data is a polynomial whose graph passes through every point. In scientific work,

such a polynomial can be used, for example, to estimate values between the known data points. Another use is to create curves for graphical images on a computer screen. One method for finding an interpolating polynomial is to solve a system of linear equations.

**WEB**

33. Find the interpolating polynomial  $p(t) = a_0 + a_1t + a_2t^2$  for the data  $(1, 6)$ ,  $(2, 15)$ ,  $(3, 28)$ . That is, find  $a_0$ ,  $a_1$ , and  $a_2$  such that

$$a_0 + a_1(1) + a_2(1)^2 = 6$$

$$a_0 + a_1(2) + a_2(2)^2 = 15$$

$$a_0 + a_1(3) + a_2(3)^2 = 28$$

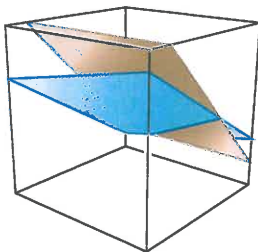
34. [M] In a wind tunnel experiment, the force on a projectile due to air resistance was measured at different velocities:

Velocity (100 ft/sec)	0	2	4	6	8	10
Force (100 lb)	0	2.90	14.8	39.6	74.3	119

Find an interpolating polynomial for these data and estimate the force on the projectile when the projectile is traveling at 750 ft/sec. Use  $p(t) = a_0 + a_1t + a_2t^2 + a_3t^3 + a_4t^4 + a_5t^5$ . What happens if you try to use a polynomial of degree less than 5? (Try a cubic polynomial, for instance.)<sup>5</sup>

<sup>5</sup> Exercises marked with the symbol [M] are designed to be worked with the aid of a "Matrix program" (a computer program, such as MATLAB<sup>®</sup>, Maple<sup>™</sup>, Mathematica<sup>®</sup>, MathCad<sup>®</sup>, or Derive<sup>™</sup>, or a programmable calculator with matrix capabilities, such as those manufactured by Texas Instruments or Hewlett-Packard).

### SOLUTIONS TO PRACTICE PROBLEMS



The general solution of the system of equations is the line of intersection of the two planes.

1. The reduced echelon form of the augmented matrix and the corresponding system are

$$\begin{bmatrix} 1 & 0 & -2 & 9 \\ 0 & 1 & 1 & 3 \end{bmatrix} \quad \text{and} \quad \begin{cases} x_1 - 2x_3 = 9 \\ x_2 + x_3 = 3 \end{cases}$$

The basic variables are  $x_1$  and  $x_2$ , and the general solution is

$$\begin{cases} x_1 = 9 + 2x_3 \\ x_2 = 3 - x_3 \\ x_3 \text{ is free} \end{cases}$$

*Note:* It is essential that the general solution describe each variable, with any parameters clearly identified. The following statement does *not* describe the solution:

$$\begin{cases} x_1 = 9 + 2x_3 \\ x_2 = 3 - x_3 \\ x_3 = 3 - x_2 \end{cases} \quad \text{Incorrect solution}$$

This description implies that  $x_2$  and  $x_3$  are *both* free, which certainly is not the case.

## 1.3 EXERCISES

In Exercises 1 and 2, compute  $\mathbf{u} + \mathbf{v}$  and  $\mathbf{u} - 2\mathbf{v}$ .

$$1. \mathbf{u} = \begin{bmatrix} -1 \\ 2 \end{bmatrix}, \mathbf{v} = \begin{bmatrix} -3 \\ -1 \end{bmatrix} \quad 2. \mathbf{u} = \begin{bmatrix} 3 \\ 2 \end{bmatrix}, \mathbf{v} = \begin{bmatrix} 2 \\ -1 \end{bmatrix}$$

In Exercises 3 and 4, display the following vectors using arrows on an  $xy$ -graph:  $\mathbf{u}$ ,  $\mathbf{v}$ ,  $-\mathbf{v}$ ,  $-2\mathbf{v}$ ,  $\mathbf{u} + \mathbf{v}$ ,  $\mathbf{u} - \mathbf{v}$ , and  $\mathbf{u} - 2\mathbf{v}$ . Notice that  $\mathbf{u} - \mathbf{v}$  is the vertex of a parallelogram whose other vertices are  $\mathbf{u}$ ,  $\mathbf{0}$ , and  $-\mathbf{v}$ .

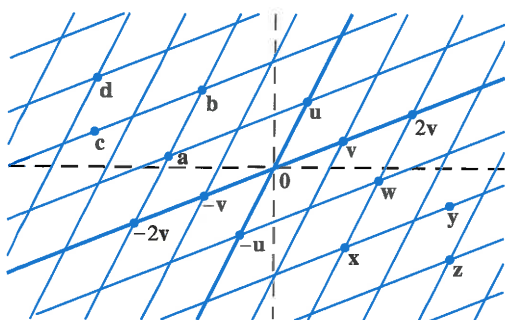
3.  $\mathbf{u}$  and  $\mathbf{v}$  as in Exercise 1      4.  $\mathbf{u}$  and  $\mathbf{v}$  as in Exercise 2

In Exercises 5 and 6, write a system of equations that is equivalent to the given vector equation.

$$5. x_1 \begin{bmatrix} 3 \\ -2 \\ 8 \end{bmatrix} + x_2 \begin{bmatrix} 5 \\ 0 \\ -9 \end{bmatrix} = \begin{bmatrix} 2 \\ -3 \\ 8 \end{bmatrix}$$

$$6. x_1 \begin{bmatrix} 3 \\ -2 \end{bmatrix} + x_2 \begin{bmatrix} 7 \\ 3 \end{bmatrix} + x_3 \begin{bmatrix} -2 \\ 1 \end{bmatrix} = \begin{bmatrix} 0 \\ 0 \end{bmatrix}$$

Use the accompanying figure to write each vector listed in Exercises 7 and 8 as a linear combination of  $\mathbf{u}$  and  $\mathbf{v}$ . Is every vector in  $\mathbb{R}^2$  a linear combination of  $\mathbf{u}$  and  $\mathbf{v}$ ?



7. Vectors  $\mathbf{a}$ ,  $\mathbf{b}$ ,  $\mathbf{c}$ , and  $\mathbf{d}$

8. Vectors  $\mathbf{w}$ ,  $\mathbf{x}$ ,  $\mathbf{y}$ , and  $\mathbf{z}$

In Exercises 9 and 10, write a vector equation that is equivalent to the given system of equations.

$$9. \begin{aligned} x_2 + 5x_3 &= 0 \\ 4x_1 + 6x_2 - x_3 &= 0 \\ -x_1 + 3x_2 - 8x_3 &= 0 \end{aligned} \quad 10. \begin{aligned} 3x_1 - 2x_2 + 4x_3 &= 3 \\ -2x_1 - 7x_2 + 5x_3 &= 1 \\ 5x_1 + 4x_2 - 3x_3 &= 2 \end{aligned}$$

In Exercises 11 and 12, determine if  $\mathbf{b}$  is a linear combination of  $\mathbf{a}_1$ ,  $\mathbf{a}_2$ , and  $\mathbf{a}_3$ .

$$11. \mathbf{a}_1 = \begin{bmatrix} 1 \\ -2 \\ 0 \end{bmatrix}, \mathbf{a}_2 = \begin{bmatrix} 0 \\ 1 \\ 2 \end{bmatrix}, \mathbf{a}_3 = \begin{bmatrix} 5 \\ -6 \\ 8 \end{bmatrix}, \mathbf{b} = \begin{bmatrix} 2 \\ -1 \\ 6 \end{bmatrix}$$

$$12. \mathbf{a}_1 = \begin{bmatrix} 1 \\ 0 \\ 1 \end{bmatrix}, \mathbf{a}_2 = \begin{bmatrix} -2 \\ 3 \\ -2 \end{bmatrix}, \mathbf{a}_3 = \begin{bmatrix} -6 \\ 7 \\ 5 \end{bmatrix}, \mathbf{b} = \begin{bmatrix} 11 \\ -5 \\ 9 \end{bmatrix}$$

In Exercises 13 and 14, determine if  $\mathbf{b}$  is a linear combination of the vectors formed from the columns of the matrix  $A$ .

$$13. A = \begin{bmatrix} 1 & -4 & 2 \\ 0 & 3 & 5 \\ -2 & 8 & -4 \end{bmatrix}, \mathbf{b} = \begin{bmatrix} 3 \\ -7 \\ -3 \end{bmatrix}$$

$$14. A = \begin{bmatrix} 1 & 0 & 5 \\ -2 & 1 & -6 \\ 0 & 2 & 8 \end{bmatrix}, \mathbf{b} = \begin{bmatrix} 2 \\ -1 \\ 6 \end{bmatrix}$$

15. Let  $\mathbf{a}_1 = \begin{bmatrix} 1 \\ 3 \\ -1 \end{bmatrix}$ ,  $\mathbf{a}_2 = \begin{bmatrix} -5 \\ -8 \\ 2 \end{bmatrix}$ , and  $\mathbf{b} = \begin{bmatrix} 3 \\ -5 \\ h \end{bmatrix}$ . For what value(s) of  $h$  is  $\mathbf{b}$  in the plane spanned by  $\mathbf{a}_1$  and  $\mathbf{a}_2$ ?

16. Let  $\mathbf{v}_1 = \begin{bmatrix} 1 \\ 0 \\ -2 \end{bmatrix}$ ,  $\mathbf{v}_2 = \begin{bmatrix} -2 \\ 1 \\ 7 \end{bmatrix}$ , and  $\mathbf{y} = \begin{bmatrix} h \\ -3 \\ -5 \end{bmatrix}$ . For what value(s) of  $h$  is  $\mathbf{y}$  in the plane generated by  $\mathbf{v}_1$  and  $\mathbf{v}_2$ ?

In Exercises 17 and 18, list five vectors in  $\text{Span}\{\mathbf{v}_1, \mathbf{v}_2\}$ . For each vector, show the weights on  $\mathbf{v}_1$  and  $\mathbf{v}_2$  used to generate the vector and list the three entries of the vector. Do not make a sketch.

$$17. \mathbf{v}_1 = \begin{bmatrix} 3 \\ 1 \\ 2 \end{bmatrix}, \mathbf{v}_2 = \begin{bmatrix} -4 \\ 0 \\ 1 \end{bmatrix}$$

$$18. \mathbf{v}_1 = \begin{bmatrix} 1 \\ 1 \\ -2 \end{bmatrix}, \mathbf{v}_2 = \begin{bmatrix} -2 \\ 3 \\ 0 \end{bmatrix}$$

19. Give a geometric description of  $\text{Span}\{\mathbf{v}_1, \mathbf{v}_2\}$  for the vectors  $\mathbf{v}_1 = \begin{bmatrix} 8 \\ 2 \\ -6 \end{bmatrix}$  and  $\mathbf{v}_2 = \begin{bmatrix} 12 \\ 3 \\ -9 \end{bmatrix}$ .

20. Give a geometric description of  $\text{Span}\{\mathbf{v}_1, \mathbf{v}_2\}$  for the vectors in Exercise 18.

21. Let  $\mathbf{u} = \begin{bmatrix} 2 \\ -1 \end{bmatrix}$  and  $\mathbf{v} = \begin{bmatrix} 2 \\ 1 \end{bmatrix}$ . Show that  $\begin{bmatrix} h \\ k \end{bmatrix}$  is in  $\text{Span}\{\mathbf{u}, \mathbf{v}\}$  for all  $h$  and  $k$ .

22. Construct a  $3 \times 3$  matrix  $A$ , with nonzero entries, and a vector  $\mathbf{b}$  in  $\mathbb{R}^3$  such that  $\mathbf{b}$  is *not* in the set spanned by the columns of  $A$ .

In Exercises 23 and 24, mark each statement True or False. Justify each answer.

23. a. Another notation for the vector  $\begin{bmatrix} -4 \\ 3 \end{bmatrix}$  is  $[-4 \ 3]$ .  
 b. The points in the plane corresponding to  $\begin{bmatrix} -2 \\ 5 \end{bmatrix}$  and  $\begin{bmatrix} -5 \\ 2 \end{bmatrix}$  lie on a line through the origin.  
 c. An example of a linear combination of vectors  $\mathbf{v}_1$  and  $\mathbf{v}_2$  is the vector  $\frac{1}{2}\mathbf{v}_1$ .



- d. The solution set of the linear system whose augmented matrix is  $[\mathbf{a}_1 \ \mathbf{a}_2 \ \mathbf{a}_3 \ \mathbf{b}]$  is the same as the solution set of the equation  $x_1\mathbf{a}_1 + x_2\mathbf{a}_2 + x_3\mathbf{a}_3 = \mathbf{b}$ .
- e. The set  $\text{Span}\{\mathbf{u}, \mathbf{v}\}$  is always visualized as a plane through the origin.
24. a. When  $\mathbf{u}$  and  $\mathbf{v}$  are nonzero vectors,  $\text{Span}\{\mathbf{u}, \mathbf{v}\}$  contains only the line through  $\mathbf{u}$  and the origin, and the line through  $\mathbf{v}$  and the origin.
- b. Any list of five real numbers is a vector in  $\mathbb{R}^5$ .
- c. Asking whether the linear system corresponding to an augmented matrix  $[\mathbf{a}_1 \ \mathbf{a}_2 \ \mathbf{a}_3 \ \mathbf{b}]$  has a solution amounts to asking whether  $\mathbf{b}$  is in  $\text{Span}\{\mathbf{a}_1, \mathbf{a}_2, \mathbf{a}_3\}$ .
- d. The vector  $\mathbf{v}$  results when a vector  $\mathbf{u} - \mathbf{v}$  is added to the vector  $\mathbf{v}$ .
- e. The weights  $c_1, \dots, c_p$  in a linear combination  $c_1\mathbf{v}_1 + \dots + c_p\mathbf{v}_p$  cannot all be zero.

25. Let  $A = \begin{bmatrix} 1 & 0 & -4 \\ 0 & 3 & -2 \\ -2 & 6 & 3 \end{bmatrix}$  and  $\mathbf{b} = \begin{bmatrix} 4 \\ 1 \\ -4 \end{bmatrix}$ . Denote the columns of  $A$  by  $\mathbf{a}_1, \mathbf{a}_2, \mathbf{a}_3$ , and let  $W = \text{Span}\{\mathbf{a}_1, \mathbf{a}_2, \mathbf{a}_3\}$ .
- a. Is  $\mathbf{b}$  in  $\{\mathbf{a}_1, \mathbf{a}_2, \mathbf{a}_3\}$ ? How many vectors are in  $\{\mathbf{a}_1, \mathbf{a}_2, \mathbf{a}_3\}$ ?
- b. Is  $\mathbf{b}$  in  $W$ ? How many vectors are in  $W$ ?
- c. Show that  $\mathbf{a}_1$  is in  $W$ . [Hint: Row operations are unnecessary.]

26. Let  $A = \begin{bmatrix} 2 & 0 & 6 \\ -1 & 8 & 5 \\ 1 & -2 & 1 \end{bmatrix}$ , let  $\mathbf{b} = \begin{bmatrix} 10 \\ 3 \\ 7 \end{bmatrix}$ , and let  $W$  be the set of all linear combinations of the columns of  $A$ .

- a. Is  $\mathbf{b}$  in  $W$ ?
- b. Show that the second column of  $A$  is in  $W$ .
27. A mining company has two mines. One day's operation at mine #1 produces ore that contains 30 metric tons of copper and 600 kilograms of silver, while one day's operation at mine #2 produces ore that contains 40 metric tons of copper and 380 kilograms of silver. Let  $\mathbf{v}_1 = \begin{bmatrix} 30 \\ 600 \end{bmatrix}$  and  $\mathbf{v}_2 = \begin{bmatrix} 40 \\ 380 \end{bmatrix}$ . Then  $\mathbf{v}_1$  and  $\mathbf{v}_2$  represent the "output per day" of mine #1 and mine #2, respectively.
- a. What physical interpretation can be given to the vector  $5\mathbf{v}_1$ ?
- b. Suppose the company operates mine #1 for  $x_1$  days and mine #2 for  $x_2$  days. Write a vector equation whose solution gives the number of days each mine should operate in order to produce 240 tons of copper and 2824 kilograms of silver. Do not solve the equation.
- c. [M] Solve the equation in (b).

28. A steam plant burns two types of coal: anthracite (A) and bituminous (B). For each ton of A burned, the plant produces 27.6 million Btu of heat, 3100 grams (g) of sulfur dioxide, and 250 g of particulate matter (solid-particle pollutants). For

each ton of B burned, the plant produces 30.2 million Btu, 6400 g of sulfur dioxide, and 360 g of particulate matter.

- a. How much heat does the steam plant produce when it burns  $x_1$  tons of A and  $x_2$  tons of B?
- b. Suppose the output of the steam plant is described by a vector that lists the amounts of heat, sulfur dioxide, and particulate matter. Express this output as a linear combination of two vectors, assuming that the plant burns  $x_1$  tons of A and  $x_2$  tons of B.
- c. [M] Over a certain time period, the steam plant produced 162 million Btu of heat, 23,610 g of sulfur dioxide, and 1623 g of particulate matter. Determine how many tons of each type of coal the steam plant must have burned. Include a vector equation as part of your solution.
29. Let  $\mathbf{v}_1, \dots, \mathbf{v}_k$  be points in  $\mathbb{R}^3$  and suppose that for  $j = 1, \dots, k$  an object with mass  $m_j$  is located at point  $\mathbf{v}_j$ . Physicists call such objects *point masses*. The total mass of the system of point masses is

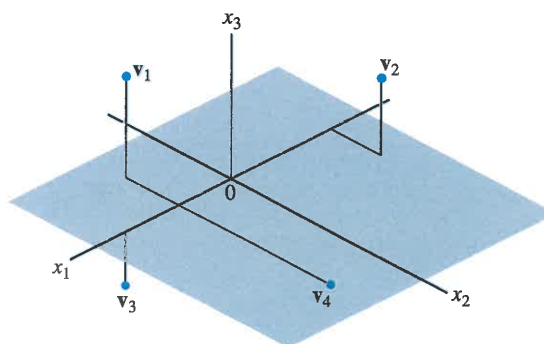
$$m = m_1 + \dots + m_k$$

The *center of gravity* (or *center of mass*) of the system is

$$\bar{\mathbf{v}} = \frac{1}{m}[m_1\mathbf{v}_1 + \dots + m_k\mathbf{v}_k]$$

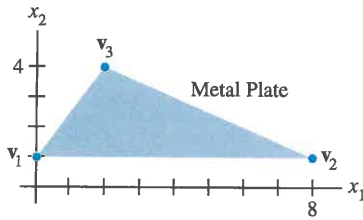
Compute the center of gravity of the system consisting of the following point masses (see the figure):

Point	Mass
$\mathbf{v}_1 = (2, -2, 4)$	4 g
$\mathbf{v}_2 = (-4, 2, 3)$	2 g
$\mathbf{v}_3 = (4, 0, -2)$	3 g
$\mathbf{v}_4 = (1, -6, 0)$	5 g

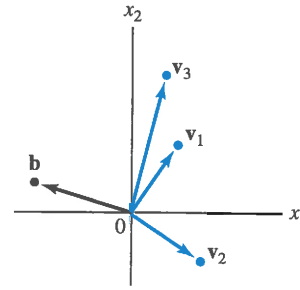


30. Let  $\mathbf{v}$  be the center of mass of a system of point masses located at  $\mathbf{v}_1, \dots, \mathbf{v}_k$  as in Exercise 29. Is  $\mathbf{v}$  in  $\text{Span}\{\mathbf{v}_1, \dots, \mathbf{v}_k\}$ ? Explain.

31. A thin triangular plate of uniform density and thickness has vertices at  $\mathbf{v}_1 = (0, 1)$ ,  $\mathbf{v}_2 = (8, 1)$ , and  $\mathbf{v}_3 = (2, 4)$ , as in the figure below, and the mass of the plate is 3 g.



- Find the  $(x, y)$ -coordinates of the center of mass of the plate. This “balance point” of the plate coincides with the center of mass of a system consisting of three 1-gram point masses located at the vertices of the plate.
  - Determine how to distribute an additional mass of 6 g at the three vertices of the plate to move the balance point of the plate to  $(2, 2)$ . [Hint: Let  $w_1, w_2$ , and  $w_3$  denote the masses added at the three vertices, so that  $w_1 + w_2 + w_3 = 6$ .]
32. Consider the vectors  $\mathbf{v}_1, \mathbf{v}_2, \mathbf{v}_3$ , and  $\mathbf{b}$  in  $\mathbb{R}^2$ , shown in the figure. Does the equation  $x_1\mathbf{v}_1 + x_2\mathbf{v}_2 + x_3\mathbf{v}_3 = \mathbf{b}$  have a



33. Use the vectors  $\mathbf{u} = (u_1, \dots, u_n)$ ,  $\mathbf{v} = (v_1, \dots, v_n)$ , and  $\mathbf{w} = (w_1, \dots, w_n)$  to verify the following algebraic properties of  $\mathbb{R}^n$ .
- $(\mathbf{u} + \mathbf{v}) + \mathbf{w} = \mathbf{u} + (\mathbf{v} + \mathbf{w})$
  - $c(\mathbf{u} + \mathbf{v}) = c\mathbf{u} + c\mathbf{v}$  for each scalar  $c$
34. Use the vector  $\mathbf{u} = (u_1, \dots, u_n)$  to verify the following algebraic properties of  $\mathbb{R}^n$ .
- $\mathbf{u} + (-\mathbf{u}) = (-\mathbf{u}) + \mathbf{u} = \mathbf{0}$
  - $c(d\mathbf{u}) = (cd)\mathbf{u}$  for all scalars  $c$  and  $d$

### SOLUTIONS TO PRACTICE PROBLEMS

1. Take arbitrary vectors  $\mathbf{u} = (u_1, \dots, u_n)$  and  $\mathbf{v} = (v_1, \dots, v_n)$  in  $\mathbb{R}^n$ , and compute

$$\begin{aligned} \mathbf{u} + \mathbf{v} &= (u_1 + v_1, \dots, u_n + v_n) && \text{Definition of vector addition} \\ &= (v_1 + u_1, \dots, v_n + u_n) && \text{Commutativity of addition in } \mathbb{R} \\ &= \mathbf{v} + \mathbf{u} && \text{Definition of vector addition} \end{aligned}$$

2. The vector  $\mathbf{y}$  belongs to  $\text{Span}\{\mathbf{v}_1, \mathbf{v}_2, \mathbf{v}_3\}$  if and only if there exist scalars  $x_1, x_2, x_3$  such that

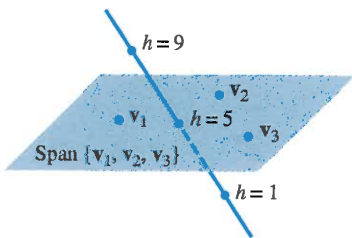
$$x_1 \begin{bmatrix} 1 \\ -1 \\ -2 \end{bmatrix} + x_2 \begin{bmatrix} 5 \\ -4 \\ -7 \end{bmatrix} + x_3 \begin{bmatrix} -3 \\ 1 \\ 0 \end{bmatrix} = \begin{bmatrix} -4 \\ 3 \\ h \end{bmatrix}$$

This vector equation is equivalent to a system of three linear equations in three unknowns. If you row reduce the augmented matrix for this system, you find that

$$\begin{bmatrix} 1 & 5 & -3 & -4 \\ -1 & -4 & 1 & 3 \\ -2 & -7 & 0 & h \end{bmatrix} \sim \begin{bmatrix} 1 & 5 & -3 & -4 \\ 0 & 1 & -2 & -1 \\ 0 & 3 & -6 & h-8 \end{bmatrix} \sim \begin{bmatrix} 1 & 5 & -3 & -4 \\ 0 & 1 & -2 & -1 \\ 0 & 0 & 0 & h-5 \end{bmatrix}$$

The system is consistent if and only if there is no pivot in the fourth column. That is,  $h - 5$  must be 0. So  $\mathbf{y}$  is in  $\text{Span}\{\mathbf{v}_1, \mathbf{v}_2, \mathbf{v}_3\}$  if and only if  $h = 5$ .

**Remember:** The presence of a free variable in a system does not guarantee that the system is consistent.



The points  $\begin{bmatrix} -4 \\ 3 \\ h \end{bmatrix}$  lie on a line that intersects the plane when  $h = 5$ .

## 1.4 THE MATRIX EQUATION $A\mathbf{x} = \mathbf{b}$

A fundamental idea in linear algebra is to view a linear combination of vectors as the product of a matrix and a vector. The following definition permits us to rephrase some of the concepts of Section 1.3 in new ways.